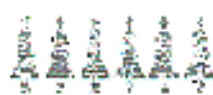
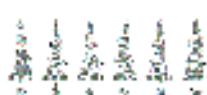
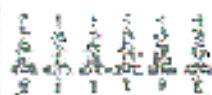


Quanti pini?



$$6 + 6 + 6 = \dots$$

6 ripetuto 3 volte.

6 PER 3 volte.

$$6 \times 3 = \dots$$

Quante foglie?




$$3 + 3 + 3 + 3 + 3 = \dots$$

3 ripetuto 5 volte.

3 PER 5 volte.

$$3 \times 5 = \dots$$

Osserva il disegno e scrivi un'addizione ripetuta e una moltiplicazione.



.....

.....