

Alunno : _____

Data : _____

D5. Quale figura corrisponde alla seguente descrizione?

“C'È UN QUADRATO DENTRO A UN RETTANGOLO”

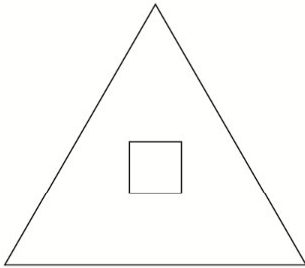


Figura 1

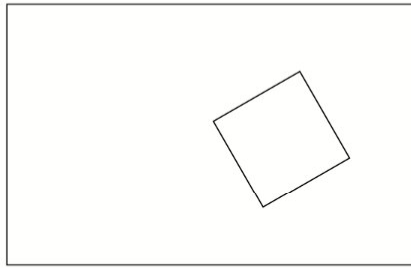


Figura 2

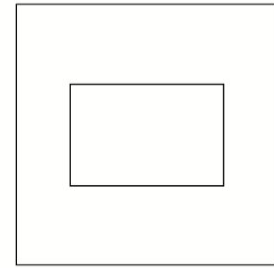


Figura 3

- A. Figura 1
- B. Figura 2
- C. Figura 3