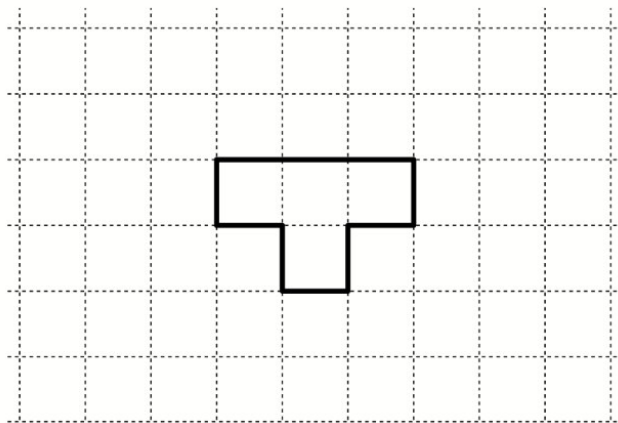


Alunno : _____

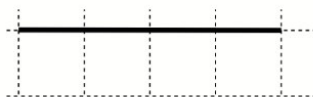
Data : _____

D13. Marco ha fatto questa figura con un filo di ferro.

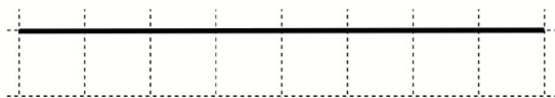


Quale di questi tre fili ha usato Marco?

A.



B.



C.

