

Alunno : _____

Data : _____

D18. Da quale foglio “di forma rettangolare” è stato ritagliato questo pezzettino?

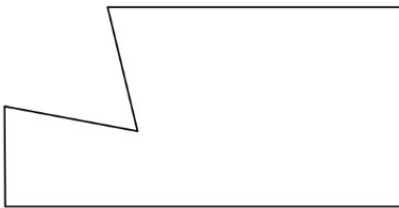



Figura 1




Figura 2



Figura 3

- A. Figura 1
- B. Figura 2
- C. Figura 3