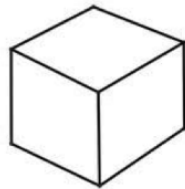
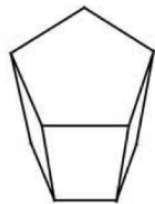


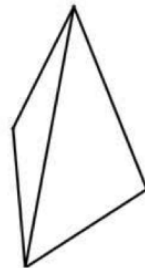
**D10. Questo è un cubo a sei facce:**



**Ora osserva queste figure.**



**Figura 1**



**Figura 2**



**Figura 3**

**a. Quale figura ha 4 facce triangolari?**

- A. Figura 1
- B. Figura 2
- C. Figura 3

**b. Quale figura ha cinque facce?**

- A. Figura 1
- B. Figura 2
- C. Figura 3