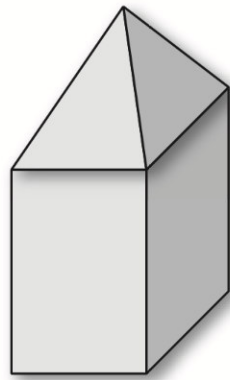


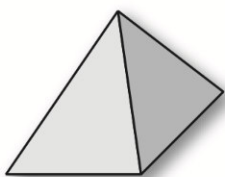
Alunno : _____

Data : _____

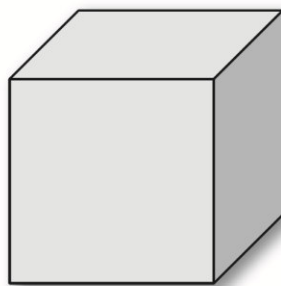
D2. Luca ha usato 2 pezzi delle sue costruzioni per costruire questa casetta.



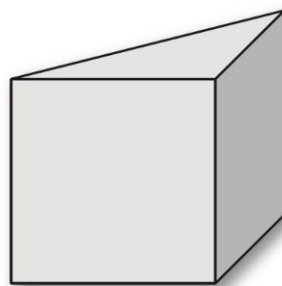
Quali fra questi pezzi ha usato Luca?



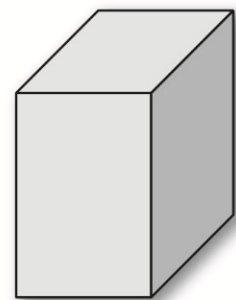
Pezzo A



Pezzo B



Pezzo C



Pezzo D

Risposta: il pezzo e il pezzo