




Alunno : _____

Data : _____

D5. Quale orologio indica le 8 e 10?

		
Orologio 1	Orologio 2	Orologio 3

- A. Orologio 1
- B. Orologio 2
- C. Orologio 3