




Alunno : _____

Data : _____

D3. Osserva la seguente tabella.

| | A | B | C |
|---|--|---|--|
| 1 |  | |  |
| 2 | | | |
| 3 | |  | |

Il sole si trova nella casella:

- A. (A, 1)
- B. (B, 3)
- C. (C, 1)